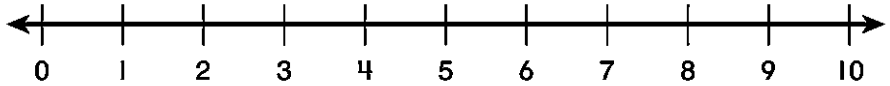
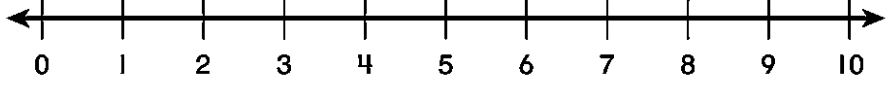
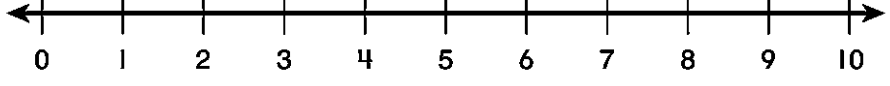
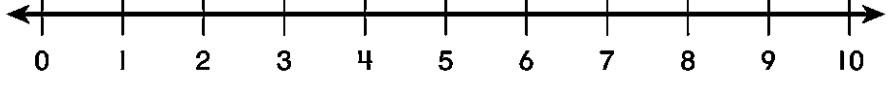
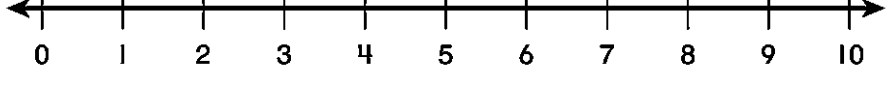


الجمع بالعد التصاعدي

أعدّ تصاعديًا لِأَجْمَع. أَسْتَعْمِلُ خَطَّ الأَعْدَادِ لِلمُسَاعَدَةِ.

| السؤال | استخدام خط الأعداد |
|---------------------------------|--|
| 7. $7 + 1 = \underline{\quad}$ |  |
| 8. $9 + 1 = \underline{\quad}$ |  |
| 9. $4 + 3 = \underline{\quad}$ |  |
| 11. $2 + 6 = \underline{\quad}$ |  |
| 12. $6 = 5 + \underline{\quad}$ |  |